



Summer Graphing FREEBIE!



Things the Kids Saw at the Beach

Beach Balls							
Sand Castles							
Crabs							
Umbrellas							

What did the kids see the most of?

What did the kids see the least of?

How many did they see? _____

How many did they see? _____

Graph Title _____

Count the beach things in the picture. Color in the graph to match.

What beach thing has the most? _____

What beach thing has the least? _____

_____ has more than _____

_____ has less than _____

NAME _____

First Grade Buddies • Co. 2014

Beach									
Park									
Pool									
Mountains									

How many kids picked beach? _____

How many kids picked park? _____

How many kids picked pool? _____

How many kids picked mountains? _____

How many kids picked beach and pool? _____

How many kids picked park and mountains? _____

In all, how many kids picked their favorite summer trip? _____

NAME _____

First Grade Buddies • Co. 2014

Things the Kids Saw at the Beach

Beach Balls							
Sand Castles							
Crabs							
Umbrellas							

Which is TRUE?


1.	They saw more beach balls than sand castles.	They saw 3 crabs.	They saw 5 umbrellas, more than beach balls.
2.	They saw 4 sand castles.	They saw 2 beach balls.	They saw 6 umbrellas.
3.	They saw 5 beach balls and sand castles.	They saw fewer crabs than sand castles.	They saw 5 crabs and umbrellas.

Which is FALSE?

1.	They saw 4 sand castles.	They saw 5 umbrellas.	They saw 1 beach ball.
2.	They saw fewer umbrellas than crabs.	They saw fewer beach balls than crabs.	They saw fewer sand castles than umbrellas.
3.	They saw more beach balls than umbrellas.	They saw more beach balls than crabs.	They saw more sand castles than umbrellas.

NAME _____







First Grade Buddies • Co. 2014



Graph Title



Count the beach things in the picture. Color in the graph to match.

What beach thing has the most?




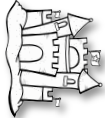
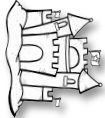









What beach thing has the least?

_____ has more than _____.


_____ has less than _____.

NAME _____


Things the Kids Saw at the Beach

Beach Balls							
Sand Castles							
Crabs							
Umbrellas							

What did the kids see the most of?



What did the kids see the least of?



How many  did they see?

How many  did they see?

NAME _____

Favorite Summer Trip

Beach	■	■	■	■	■	■			
Park	■	■	■	■					
Pool	■	■	■	■	■	■	■	■	
Mountains	■	■	■						
	1	2	3	4	5	6	7	8	9

How many kids picked beach ?	How many kids picked park ?	How many kids picked pool ?	How many kids picked mountains ?

How many kids picked **beach** and **pool**? _____













How many kids picked **park** and **mountains**? _____

In all, how many kids picked their favorite summer trip? _____



NAME _____

Things the Kids Saw at the Beach

Beach Balls							
Sand Castles							
Crabs							
Umbrellas							


Which is TRUE?

1.	They saw more beach balls than sand castles.	They saw 3 crabs	They saw more umbrellas than beach balls.
2.	They saw 4 sand castles.	They saw 2 beach balls.	They saw 6 umbrellas.
3.	They saw 5 beach balls and sand castles.	They saw fewer crabs than sand castles.	They saw 5 crabs and umbrellas.

Which is FALSE?

1.	They saw 4 sand castles.	They saw 5 umbrellas.	They saw 1 beach ball.
2.	They saw fewer umbrellas than crabs.	They saw fewer beach balls than crabs.	They saw fewer sand castles than umbrellas.
3.	They saw more beach balls than umbrellas.	They saw more beach balls than crabs.	They saw more sand castles than umbrellas.

NAME _____



More Summer Goodies!

Kindergarten Math Bags
SUMMER VERSION
10 Common Core Aligned Independent Math Activities
Created by First Grade Buddies

1st Grade Math Bags
SUMMER VERSION
10 Common Core Aligned Independent Math Activities
Created by First Grade Buddies

2nd Grade Math Bags
SUMMER VERSION
10 Common Core Aligned Independent Math Activities
Created by First Grade Buddies

Summer Math Bags

EOY Awards

End of Year SUPERLATIVE AWARDS

10 MORE AWARDS GUARANTEED TO MAKE YOUR STUDENTS FEEL SPECIAL AND SPECIAL!

Created by First Grade Buddies

100+ Activities!

and is presented to

UPON COMPLETION OF first grade

2015-2016

Thanks for a great year!

Signed: _____ Date: _____

FREE!

EOY Review! Summer Center Pack

Writing

Math

Reading

Language

End of Year Fun!
Reading, Language, Writing, and Math Activities to Celebrate a Great Year and Prepare for Summer!

FREE RESOURCES!

FREE RESOURCES!

How can you find a book for you?

Too Hard

Too Easy

Just Right



Credits

