






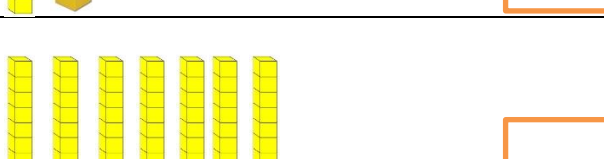

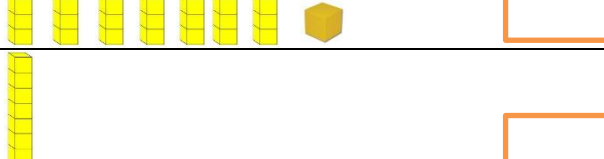
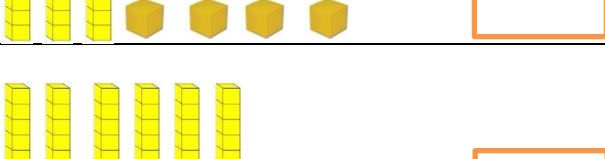

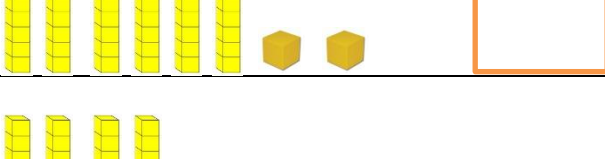
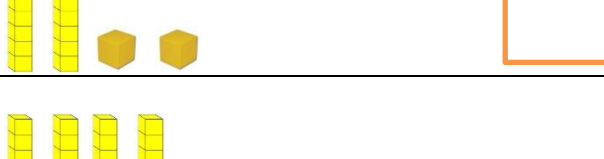


Name: _____ Date: _____

Place Value Base 10 Block Practice


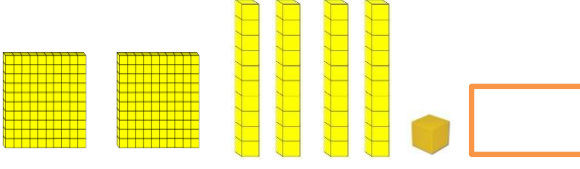

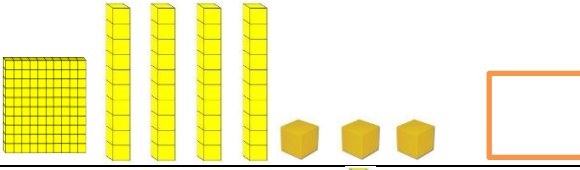
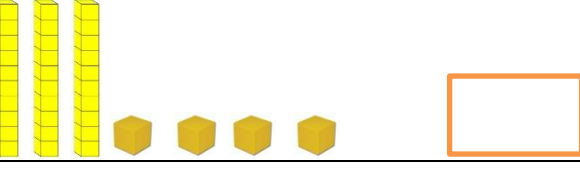
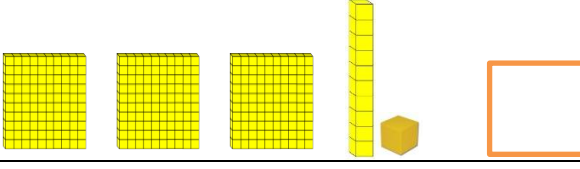
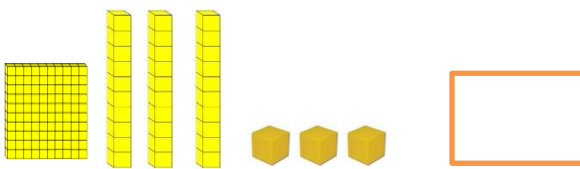
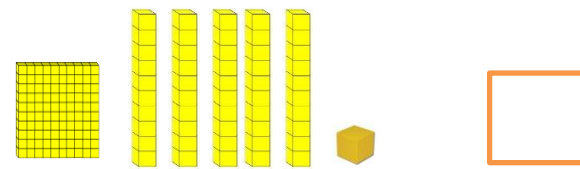
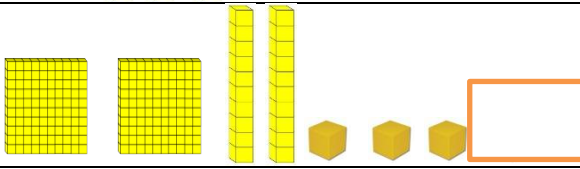

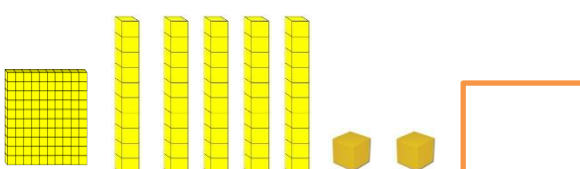
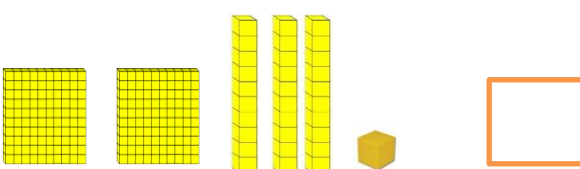
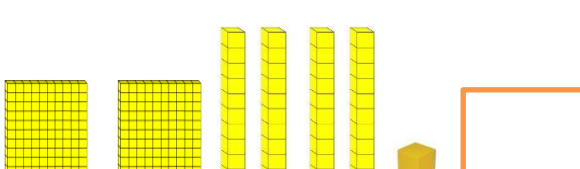
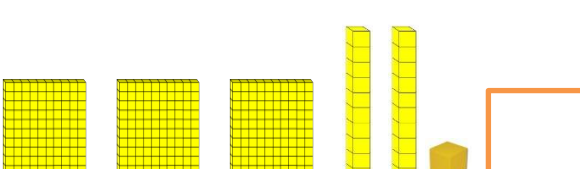
What number is shown?

 <input type="text"/>	 <input type="text"/>
 <input type="text"/>	 <input type="text"/>
 <input type="text"/>	 <input type="text"/>
 <input type="text"/>	 <input type="text"/>
 <input type="text"/>	 <input type="text"/>
 <input type="text"/>	 <input type="text"/>
 <input type="text"/>	 <input type="text"/>

Name: _____ Date: _____

Place Value Base 10 Block Practice











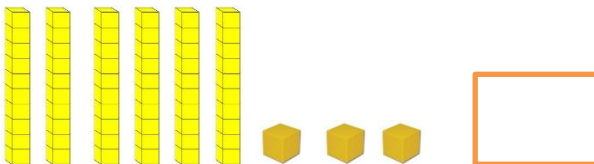


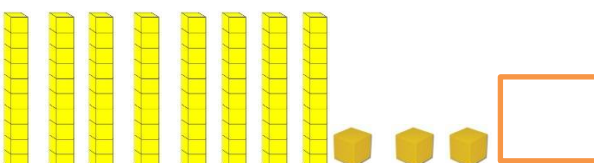
What number is shown?

 A 10x10 grid (1 ten), two 10x1 rods (2 tens), and four 1x1 units (4 ones).	 A 10x10 grid (1 ten), another 10x10 grid (2 tens), four 10x1 rods (4 tens), and one 1x1 unit (1 one).
 A 10x10 grid (1 ten), two 10x1 rods (2 tens), and five 1x1 units (5 ones).	 A 10x10 grid (1 ten), four 10x1 rods (4 tens), and three 1x1 units (3 ones).
 Three 10x1 rods (3 tens) and four 1x1 units (4 ones).	 Three 10x10 grids (3 tens), one 10x1 rod (1 ten), and one 1x1 unit (1 one).
 A 10x10 grid (1 ten), three 10x1 rods (3 tens), and three 1x1 units (3 ones).	 A 10x10 grid (1 ten), five 10x1 rods (5 tens), and one 1x1 unit (1 one).
 A 10x10 grid (1 ten), another 10x10 grid (2 tens), two 10x1 rods (2 tens), and three 1x1 units (3 ones).	 A 10x10 grid (1 ten), two 10x1 rods (2 tens), and six 1x1 units (6 ones).
 A 10x10 grid (1 ten), five 10x1 rods (5 tens), and two 1x1 units (2 ones).	 A 10x10 grid (1 ten), another 10x10 grid (2 tens), three 10x1 rods (3 tens), and one 1x1 unit (1 one).
 A 10x10 grid (1 ten), another 10x10 grid (2 tens), four 10x1 rods (4 tens), and one 1x1 unit (1 one).	 A 10x10 grid (1 ten), three 10x10 grids (3 tens), two 10x1 rods (2 tens), and one 1x1 unit (1 one).

Name: _____ Date: _____

Place Value Base 10 Block Practice

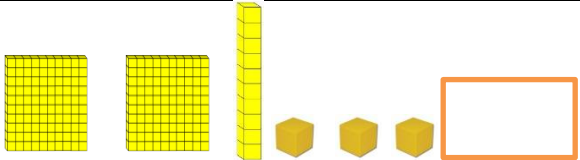
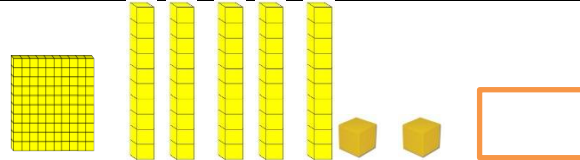
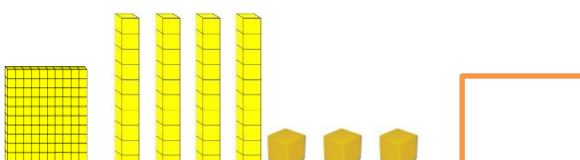
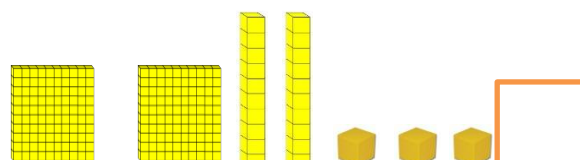
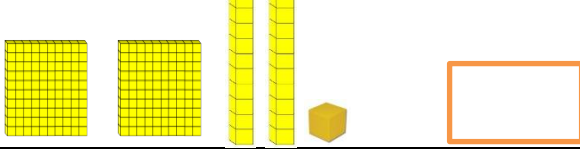
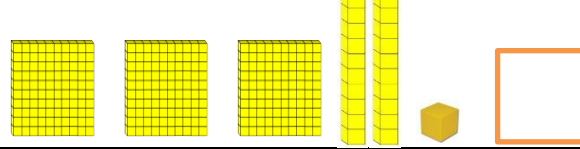
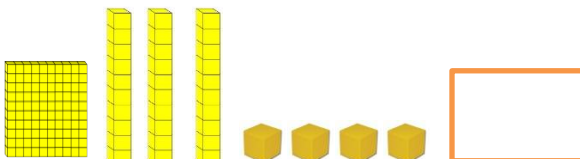
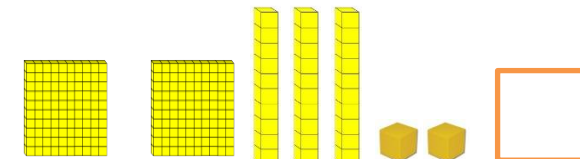
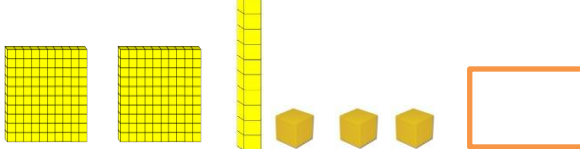


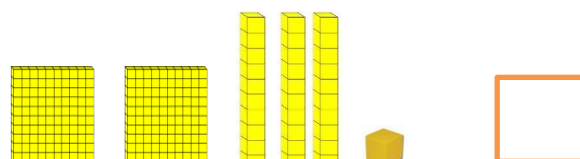
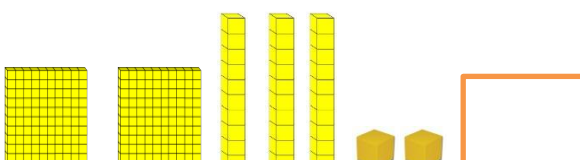
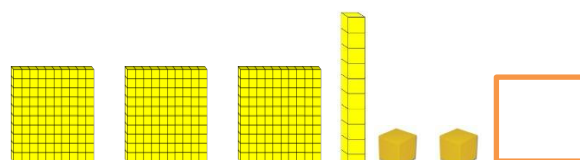
What number is shown?

 <input data-bbox="643 394 776 478" type="text"/>	 <input data-bbox="1292 401 1425 478" type="text"/>
 <input data-bbox="643 579 776 663" type="text"/>	 <input data-bbox="1312 583 1445 667" type="text"/>
 <input data-bbox="643 751 776 835" type="text"/>	 <input data-bbox="1312 741 1445 825" type="text"/>
 <input data-bbox="643 938 776 1022" type="text"/>	 <input data-bbox="1312 938 1445 1022" type="text"/>
 <input data-bbox="662 1115 795 1199" type="text"/>	 <input data-bbox="1312 1104 1445 1188" type="text"/>
 <input data-bbox="662 1308 795 1392" type="text"/>	 <input data-bbox="1312 1308 1445 1392" type="text"/>
 <input data-bbox="662 1501 795 1585" type="text"/>	 <input data-bbox="1312 1501 1445 1585" type="text"/>

Name: _____ Date: _____

Place Value Base 10 Block Practice














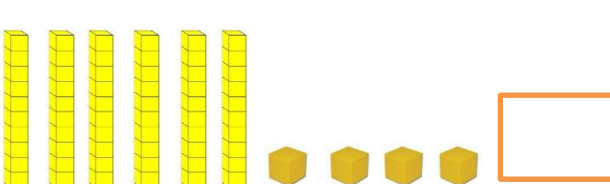
What number is shown?

 A grid of 200 small squares (2 hundreds), a vertical rod of 10 small squares (1 ten), and 3 small squares (3 ones). An empty box is to the right.	 A grid of 100 small squares (1 hundred), 5 vertical rods of 10 small squares each (5 tens), and 2 small squares (2 ones). An empty box is to the right.
 A grid of 100 small squares (1 hundred), 4 vertical rods of 10 small squares each (4 tens), and 3 small squares (3 ones). An empty box is to the right.	 A grid of 100 small squares (1 hundred), another grid of 100 small squares (2 hundreds), 2 vertical rods of 10 small squares each (2 tens), and 3 small squares (3 ones). An empty box is to the right.
 A grid of 200 small squares (2 hundreds), 2 vertical rods of 10 small squares each (2 tens), and 1 small square (1 one). An empty box is to the right.	 A grid of 100 small squares (1 hundred), another grid of 100 small squares (2 hundreds), 3 vertical rods of 10 small squares each (3 tens), and 1 small square (1 one). An empty box is to the right.
 A grid of 100 small squares (1 hundred), 3 vertical rods of 10 small squares each (3 tens), and 4 small squares (4 ones). An empty box is to the right.	 A grid of 100 small squares (1 hundred), another grid of 100 small squares (2 hundreds), 3 vertical rods of 10 small squares each (3 tens), and 2 small squares (2 ones). An empty box is to the right.
 A grid of 200 small squares (2 hundreds), a vertical rod of 10 small squares (1 ten), and 3 small squares (3 ones). An empty box is to the right.	 A grid of 100 small squares (1 hundred), a vertical rod of 10 small squares (1 ten), and 7 small squares (7 ones). An empty box is to the right.
 A grid of 100 small squares (1 hundred), 3 vertical rods of 10 small squares each (3 tens), and 4 small squares (4 ones). An empty box is to the right.	 A grid of 100 small squares (1 hundred), another grid of 100 small squares (2 hundreds), 3 vertical rods of 10 small squares each (3 tens), and 1 small square (1 one). An empty box is to the right.
 A grid of 200 small squares (2 hundreds), 3 vertical rods of 10 small squares each (3 tens), and 2 small squares (2 ones). An empty box is to the right.	 A grid of 100 small squares (1 hundred), another grid of 100 small squares (2 hundreds), 3 vertical rods of 10 small squares each (3 tens), and 2 small squares (2 ones). An empty box is to the right.

Name: _____ Date: _____

Place Value Base 10 Block Practice


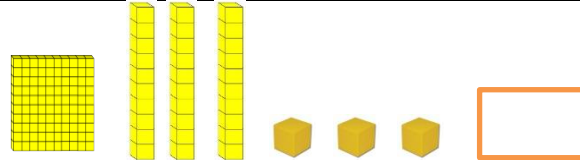
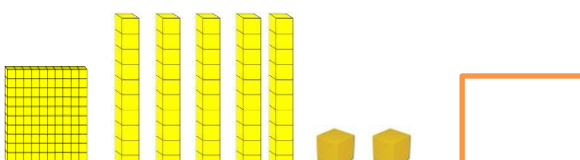
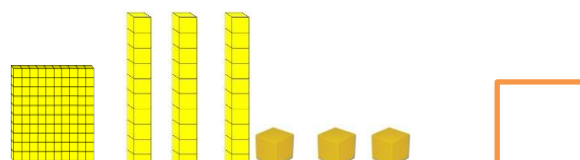
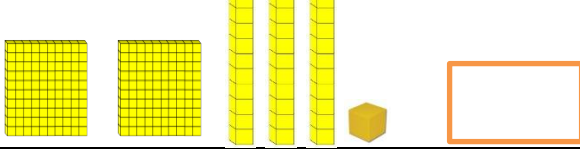
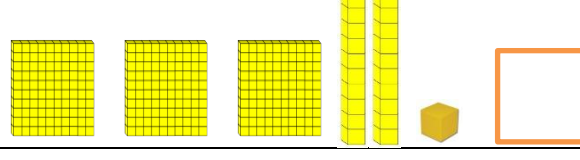
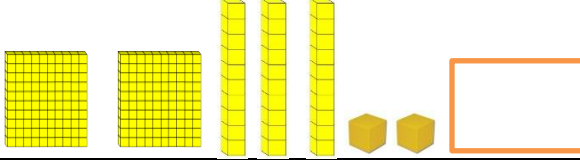
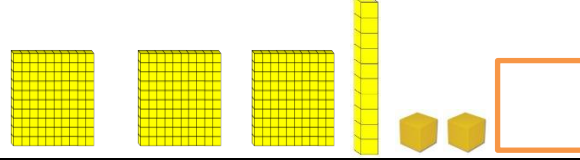
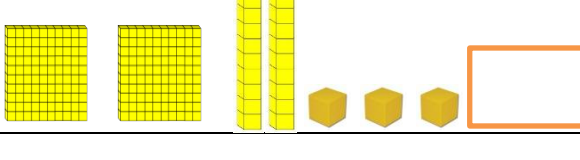
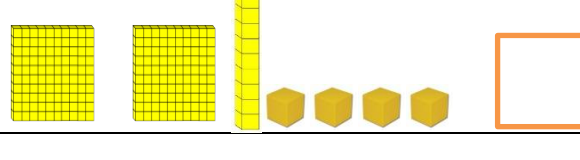
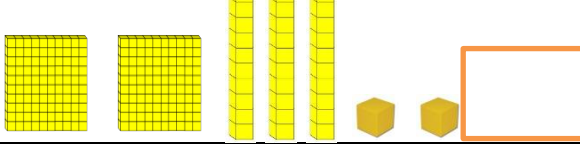
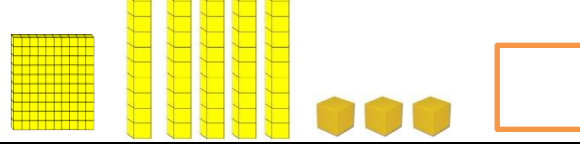
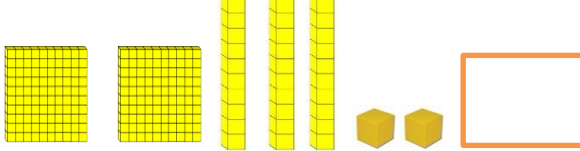
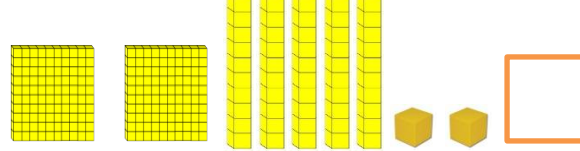
What number is shown?

 <input type="text"/>	 <input type="text"/>
 <input type="text"/>	 <input type="text"/>
 <input type="text"/>	 <input type="text"/>
 <input type="text"/>	 <input type="text"/>
 <input type="text"/>	 <input type="text"/>
 <input type="text"/>	 <input type="text"/>
 <input type="text"/>	 <input type="text"/>

Name: _____ Date: _____

Place Value Base 10 Block Practice

What number is shown?

 A 10x10 grid (100), a 10x1 rod (10), and four 1x1 units (4).	 A 10x10 grid (100), three 10x1 rods (30), and three 1x1 units (3).
 A 10x10 grid (100), five 10x1 rods (50), and two 1x1 units (2).	 A 10x10 grid (100), three 10x1 rods (30), and three 1x1 units (3).
 Two 10x1 rods (20), two 10x10 grids (200), and one 1x1 unit (1).	 Three 10x1 rods (30), three 10x10 grids (300), and one 1x1 unit (1).
 Two 10x1 rods (20), two 10x10 grids (200), and two 1x1 units (2).	 Three 10x1 rods (30), three 10x10 grids (300), and two 1x1 units (2).
 Two 10x1 rods (20), two 10x10 grids (200), and three 1x1 units (3).	 One 10x1 rod (10), two 10x10 grids (200), and four 1x1 units (4).
 Three 10x1 rods (30), two 10x10 grids (200), and two 1x1 units (2).	 Five 10x1 rods (50), one 10x10 grid (100), and three 1x1 units (3).
 Three 10x1 rods (30), two 10x10 grids (200), and two 1x1 units (2).	 Five 10x1 rods (50), two 10x10 grids (200), and two 1x1 units (2).